

Name: _____ Per _____ Date _____

Test: **General Test 14-15 Version B**

1) What is posterior to your toes?

- A _____ Heel
- B _____ Leg
- C _____ Head
- D _____ Thigh
- E _____ Hip

2) Your palm is _____ because it is face up.

- A _____ Supine
- B _____ Inferior
- C _____ Medial
- D _____ Awesome
- E _____ Lateral

3) Your Knee is proximal to what other part of your body?

- A _____ Shoulders
- B _____ Neck
- C _____ all of the above
- D _____ Stomach
- E _____ Feet

4) Your heart is _____ (direction) to your urinary bladder.

- A _____ prone
- B _____ superior
- C _____ posterior
- D _____ anterior

5) What is an example of a structure made of connective tissue?

- A _____ skin
- B _____ pupilis
- C _____ bones
- D _____ DNA

E _____ brain

6) Which of the following organs can be located in the nervous system?

- A _____ Stomach
- B _____ Heart
- C _____ Lungs
- D _____ Brain
- E _____ Liver

7) What makes up a molecule?

- A _____ lipids
- B _____ ions
- C _____ proteins
- D _____ macromolecules
- E _____ atoms

8) What is the highest, most complex level in an organization chart?

- A _____ cell
- B _____ Molecule
- C _____ Organelle
- D _____ Organ
- E _____ Organism

9) Which system produces sperm and eggs needed to create a new person?

- A _____ Excretory
- B _____ Digestive
- C _____ Muscular
- D _____ Reproductive
- E _____ nervous

10) Which system controls the release of hormones into the body?

- A _____ nervous

- B _____ Digestive
- C _____ Reproductive
- D _____ Endocrine
- E _____ Excretory

11) The pelvic cavity does NOT contain

- A _____ the reproductive organs
- B _____ the rectum
- C _____ the bladder
- D _____ the small intestine

12) The gallbladder is located in the

- A _____ cranial cavity
- B _____ abdominal cavity
- C _____ Mediastinum cavity
- D _____ Thoracic cavity

15) Write the number 15 on the line pointing to the Pericardial cavity.

16) What is the name for your upper arm?

- A _____ fibular
- B _____ otic
- C _____ umbilical
- D _____ orbital
- E _____ Brachial

17) What is the region commonly called your ankle?

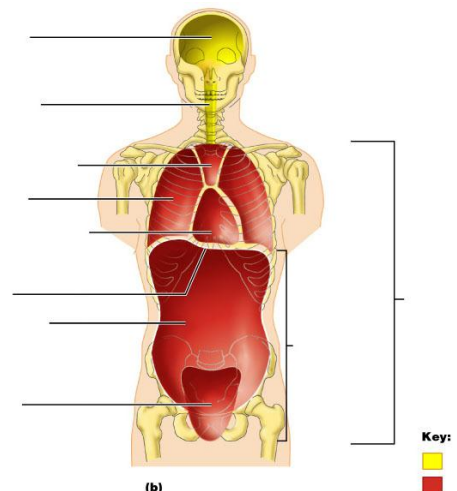
- A _____ cephalic
- B _____ tarsal
- C _____ carpal
- D _____ oral
- E _____ thoracic

13) Which body cavity contains only your your lungs?

- A _____ Thoracic
- B _____ pleural
- C _____ abdominal
- D _____ vertebral
- E _____ pelvic

14) What organ is in the thoracic cavity?

- A _____ heart
- B _____ kidney
- C _____ liver
- D _____ urethra
- E _____ colon



18) What is your oral region?

- A _____ Finger
- B _____ forehead
- C _____ leg
- D _____ mouth
- E _____ Shoulder

19) Thoracic refers to your _____.

- A _____ chest
- B _____ thigh
- C _____ pelvis
- D _____ arm
- E _____ neck

20) What is the name of the bottom of your feet?

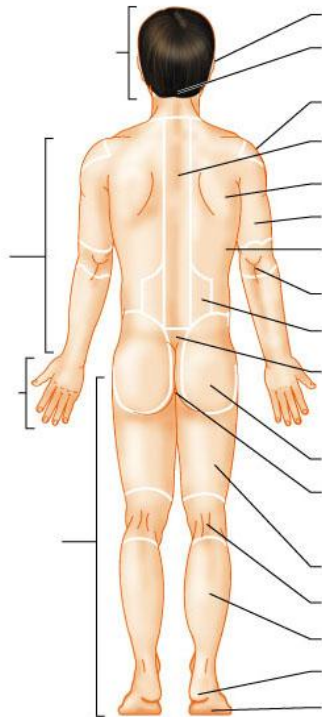
- A _____ Orbital
- B _____ Pedal
- C _____ Frontal
- D _____ Lumbar
- E _____ Plantar

21) Write the number 21 on the line pointing to the cephalic region.

22) Write the number 22 on the line pointing to the acromial region.

23) Write the number 23 on the line pointing to the gluteal region.

24) Write the number 24 on the line pointing to the lumbar region.



(b)

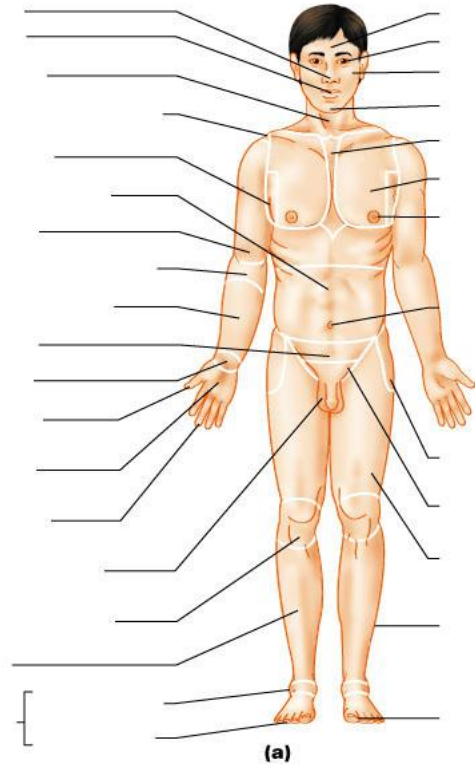
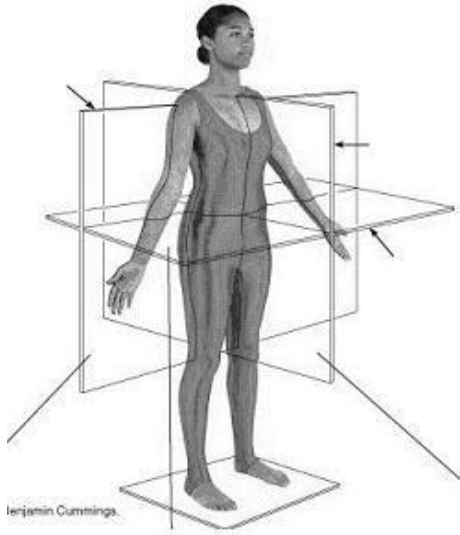
25) Write the number 25 on the line pointing to the otic region.

26) Write the number 26 on the line pointing to the pelvic region

27) Write the number 27 on the line pointing to the brachial region.

28) Write the number 28 on the line pointing to the imaginary "wall" that is in a frontal plane?

29) Write the number 29 on the line pointing to the imaginary "wall" that is in a transverse plane?



Copyright © 2004 Pearson Education, Inc., publishing as Benjamin Cummings.

30) Which of the following body parts would you slice in a mid-sagittal section?

- A _____ elbow
- B _____ ear
- C _____ nose
- D _____ leg